

**Dr. Virendra Swarup Education Centre (Sr. Wing) Shyam Nagar, Kanpur**  
**Holiday Home Work (2022-2023)**  
**Class – II**

**English:**

- Do page Nos. 3, 5, 7, 8, 9, 10, 11, 12, 13, 14, 15, 16, 17, 18 & 19 in your 'Time to Write' book.
  - Learn the poem 'Chef's Tips' from Cherry I book
  - Do the given pg. nos. in your 'Grammar Magic' book
  - 7-11 (Sentence), 16-17 (Punctuations), 18-21 (Nouns) 61-63 (Is, Am, Are) 115 (Comprehension)
  - Solve the given revision sheet in the register.
  - Activity  
Make a cut out of an elephant or a mouse. Find any two interesting facts about it and write them on the cut out. Paste an ice-cream stick to make it as a puppet. (Write your name, class, sec. at the back of the puppet). You can decorate it also. (10 mm.)
  - From '**Core Value' Book** read the Chapter **Carrots and Cabbage, Please** and from the chapters write
    - the names of atleast 8 food items.
    - the meaning of the given words. Learn also
- a) breathless                      b) junk food                      c) curling                      d) grin
- Atleast 10 naming words
  - 5 doing words
  - On a comment sheet
- Find two new words daily. Make a meaningful sentence with each word and write it in dictation notebook.

**Maths:**

1. Take out the printout of worksheets 1, 2 and 3 and solve in the sheet. Paste the sheets in the register.
2. Mental Maths book
  - Complete Test Paper 1, 2, 3 and 4
  - Assignment Sheets 1, 2 and 3
  - Page Nos. 30-35.

**Science:**

Read the chapters mentioned below. Complete back exercises and learn the important points of the chapters

Ch.1 My Body

Ch. 2. The Food We Eat

**Activity**

A Healthy Food Plate

On a thermocol Plate, Stick the cut outs of your favourite food items (balanced diet) and decorate it with different materials. (10 mm)

**Computer:**

Draw any two input devices and two output devices and write two sentences about each device in computer notebook.

**Social studies:**

Take out a printout of the sheet. Complete it and paste it in Social Studies notebook.

**English Revision July Test (H.H.W) (2022-2023)**

**Class: II**

**Q-I Punctuate the given sentences correctly-**

- 1- have you ever seen an african elephant
- 2- tarun is my younger brother he is very playful
- 3- monday comes after sunday
- 4- rohan went to delhi in july

**Q-II Make sentences using the following words-**

- |          |           |
|----------|-----------|
| 1- deer- | 2- right- |
| dear-    | write-    |
| 3- hole- |           |
| whole-   |           |

**Q-III Rearrange the jumbled words correctly to form meaningful sentences-**

- 1- the/tree/under/Sohail/sitting/is
- 2- leaves/is/goat/eating/The
- 3- father/My/strong/is/man/a
- 4- fox/jumped/over/the/wall/A

**Q-IV Write the following titles using the capital letters in the correct places-**

- |                            |                                  |
|----------------------------|----------------------------------|
| 1- the great wall of china | 2- the fox and the grapes        |
| 3- gateway of india        | 4- alibaba and the forty thieves |

**Q-V Underline the nouns. Write if they are common nouns or proper nouns. One is done for you.**

- |   |                                   |
|---|-----------------------------------|
| 1- Mukul is my brother.<br>Mukul- proper noun<br>brother- common noun | 2- Patna is the capital of Bihar. |
| 3- Madan is a clever gardener.  | 4- We get silk from silkworm.     |

**\*Note- Solve the sheet in the register.**

Fill in the blanks

- Houses made from block of ice are called \_\_\_\_\_ (igloos/ houseboats)
- We wear \_\_\_\_\_ ( cotton/ woollen) clothes in summer.
- Houses on the mountains have ( flat/ sloping) roofs.

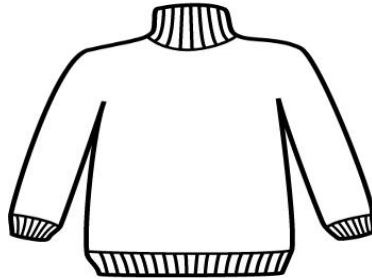
Give two examples of each:-

- Temporary houses \_\_\_\_\_ , \_\_\_\_\_
- Things used to make pucca house \_\_\_\_\_ , \_\_\_\_\_
- Types of clothes we wear \_\_\_\_\_ , \_\_\_\_\_

Write true or false:-

- Cotton clothes keep us cool \_\_\_\_\_.
- We wear woollen clothes during rainy season \_\_\_\_\_.
- We wear different clothes at different times of the year \_\_\_\_\_.

Identify the clothes and name the season:-



ACTIVITY:-

Paste the pictures of 10 different types of houses which are found around the world and write a sentence on each. (Paste the pictures on an art sheet)

डॉ० वीरेंद्र स्वरूप एजुकेशन सेंटर, श्यामनगर, कानपुर.  
ग्रीष्मकालीन अवकाश हेतु गृहकार्य  
कक्षा- दो

नोट:- सभी बच्चे दिए गए कार्य को हिन्दी अभ्यास पुस्तिका (practice notebook) में करेंगे तथा बहुत सुंदर लिखावट में लिखेंगे ।

- १) आप अपने घर को किन-किन चीज़ों से साफ़ करते हैं, उनका चित्र बनाकर अथवा चिपकाकर उसके नाम लिखकर यह बताइए कि वे किस काम आते हैं ।



- २) चित्र देखकर उसमें से संज्ञा शब्द छाँटकर लिखिए :-

- ३) सुलेख – दी गई तिथियों तथा पृष्ठ संख्या के अनुसार पुस्तक ताना बाना से सुलेख लिखिए तथा उनमें से संज्ञा शब्दों को रंगीन पेंसिल से रेखांकित कीजिये ।

दिनांक	पृष्ठ संख्या
२०/५/२०२२	“एक दिन----- फँस गए।” (३)
२३/५/२०२२	वह टाइम----- खुश हुआ। (८)
२७/५/२०२२	फिर वह----- पास पहुँचा।(९)
३०/५/२०२२	राजमहल----- करने लगा। (११)
१/६/२०२२	तब दादाजी----- करते हैं।(१४)
४/६/२०२२	रजत अपने----- रोकना चाहिए।(१६)
९/६/२०२२	आयुष अपने----- हो गए।(२१)
११/६/२०२२	माँ ने----- रखना चाहिए।”(२२)


४) एक ड्राइंग शीट पर अपने राष्ट्रीय ध्वज तिरंगे का चित्र बनाकर रंग भरिए तथा उसी शीट पर राष्ट्रीय गान लिखकर उसे कंठस्थ कीजिए ।

P..5..

Dr. Virendra Swarup Education Centre ( S.W ) Shyam Nagar  
MATHS WORKSHEET:1 Class 2

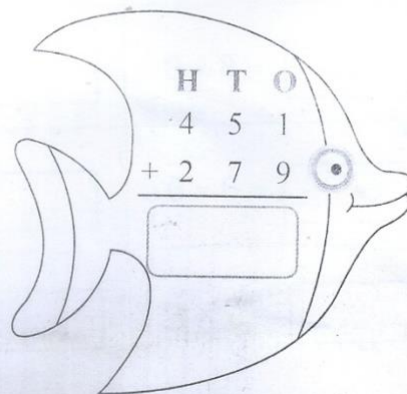
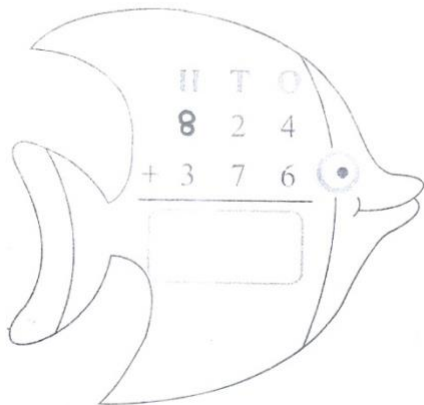
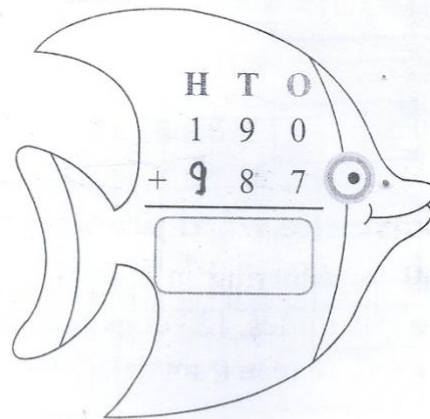
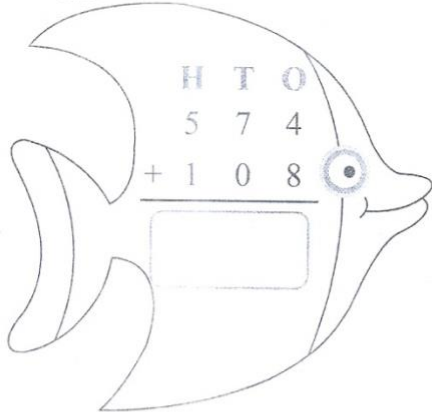
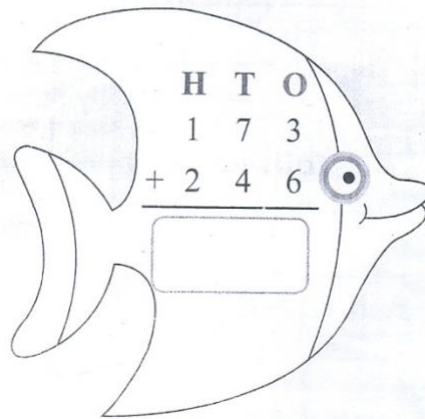
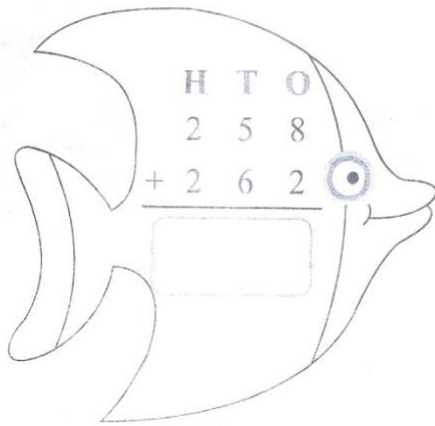
COMPLETE THE MULTIPLICATION.

Tree



P..6..

Add the numbers in the belly of the fish. Colour the fish having the largest sum in yellow. Colour the fish having the smallest sum in pink. Colour the rest of the fish in light green.





1. Match the facts to the number and number name.

	FACT	NUMBER	NUMBER NAME
1.	The smallest 3-digit number	365	Nine hundred ninety-nine
2.	The largest 3-digit number	99	Three hundred sixty-six
3.	1 less than 100	652	One thousand
4.	1 more than 999	708	One hundred ①
5.	10 less than 678	888	Eight hundred eighty-eight
6.	100 more than 552	100 ①	Seven hundred eight
7.	The number of days in a year	366	Ninety-nine
8.	The number of days in a leap year	668	Six hundred fifty-two
9.	The number just after 707	999	Three hundred sixty-five
10.	The number just before 889	1000	Six hundred sixty-eight

2. Fill in the blanks choosing the correct option from the table.

985	197	368	702	840
487	545	231	394	259

- (a) A number with 4 ones 394
- (b) A number with 3 tens \_\_\_\_\_
- (c) A number between 400 and 500 \_\_\_\_\_
- (d) A number greater than 980 \_\_\_\_\_
- (e) A number in which 2 digits are same \_\_\_\_\_
- (f) A number between 800 and 850 \_\_\_\_\_
- (g) A number with 7 hundreds \_\_\_\_\_
- (h) A number smaller than 200 \_\_\_\_\_
- (i) A number with 8 ones \_\_\_\_\_
- (j) A number with 5 tens \_\_\_\_\_